

53:139 Foundation Engineering

Homework #8 Solutions

Spring Semester 2009

53:139 Foundation Engineering
Department of Civil & Environmental Engineering
The University of Iowa
Assignment #8 Solution

Book Problems: From Chapter 9, solve problems: 1, 5, 8, 9, 16, and 17.

Supplemental Problem #1:

For a vertical retaining wall of height H and a sloping granular backfill of unit weight γ and friction angle ϕ , making angle α with respect to the horizontal, the resultant Rankine active and passive forces acting on the wall are given by the following relations:

$$P_a = \frac{\gamma H^2}{2} \cos \alpha \left[\frac{\cos \alpha - (\cos^2 \alpha - \cos^2 \phi)^{1/2}}{\cos \alpha + (\cos^2 \alpha - \cos^2 \phi)^{1/2}} \right]$$

$$P_p = \frac{\gamma H^2}{2} \cos \alpha \left[\frac{\cos \alpha + (\cos^2 \alpha - \cos^2 \phi)^{1/2}}{\cos \alpha - (\cos^2 \alpha - \cos^2 \phi)^{1/2}} \right]$$

The resultant forces act parallel to the sloping granular backfill that makes angle α with respect to the horizontal. **Derive both of these results using fundamental principles.**



Supplemental Problem #2:

In Section 9.7 of the textbook, the special case of a cantilever wall penetrating a saturated clay soil is considered. Using equilibrium considerations derive Eqs. (9.52) – (9.55). Show all of your work with labeled sketch.

9.1 a. Refer to Figure 9.7 in the text. $L_1 = 4$ m; $L_2 = 8$ m

$$\gamma = 16.1 \text{ kN / m}^3; \gamma_{\text{sat}} = 18.2 \text{ kN / m}^3; \phi = 32^\circ$$

$$\gamma' = 18.2 - 9.81 = 8.39 \text{ kN / m}^3$$

$$K_a = \tan^2\left(45 - \frac{32}{2}\right) = 0.307; \quad K_p = \tan^2\left(45 + \frac{32}{2}\right) = 3.255$$

$$\sigma'_1 = \gamma L_1 K_a = (16.1)(4)(0.307) = 19.77 \text{ kN / m}^2$$

$$\sigma'_2 = (\gamma L_1 + \gamma' L_2) K_a = [(16.1)(4) + (8.39)(8)](0.307) = 40.38 \text{ kN / m}^2$$

$$L_3 = \frac{40.38}{(8.39)(3.255 - 0.307)} = 1.63 \text{ m}$$

$$P = \frac{1}{2}(4)(19.77) + (8)(19.77) + \frac{1}{2}(8)(40.38 - 19.77) \\ + \frac{1}{2}(1.63)(40.38) = 39.54 + 158.16 + 82.44 + 32.91 = 313.05 \text{ kN / m}$$

$$P(\bar{z}) = (39.54)\left(9.63 + \frac{4}{3}\right) + (158.16)(5.63) + (82.44)\left(1.63 + \frac{8}{3}\right) \\ + \left(\frac{(2)(1.63)}{3}\right)(32.91)$$

$$\bar{z} = \frac{1713.91}{313.05} = 5.47 \text{ m}$$

$$\sigma'_3 = (\gamma L_1 + \gamma' L_2) K_p + \gamma' L_3 (K_p - K_a) \\ = [(16.1)(4) + (8.39)(8)](3.255) + (8.39)(1.63)(2.948) = 468.4 \text{ kN / m}^2$$

$$A_1 = \frac{468.4}{(8.39)(2.948)} = 18.94$$

$$A_2 = \frac{(8)(313.05)}{(8.39)(2.948)} = 101.25$$

$$A_3 = \frac{(6)(313.05)[(2)(5.47)(8.39)(2.948) + 468.4]}{(8.39)^2 (2.948)^2} = 2268.94$$

$$A_4 = \frac{(313.05)[(6)(5.47)(468.4) + (4)(313.05)]}{(8.39)^2 (2.948)^2} = 8507.44$$

$$L_4^4 + 18.94L_4^3 - 101.25L_4^2 - 2268.94L_4 - 8507.44 = 0; L_4 = 11.68 \text{ m}$$

$$D = L_3 + L_4 = 1.63 + 11.68 = 13.31 \text{ m}$$

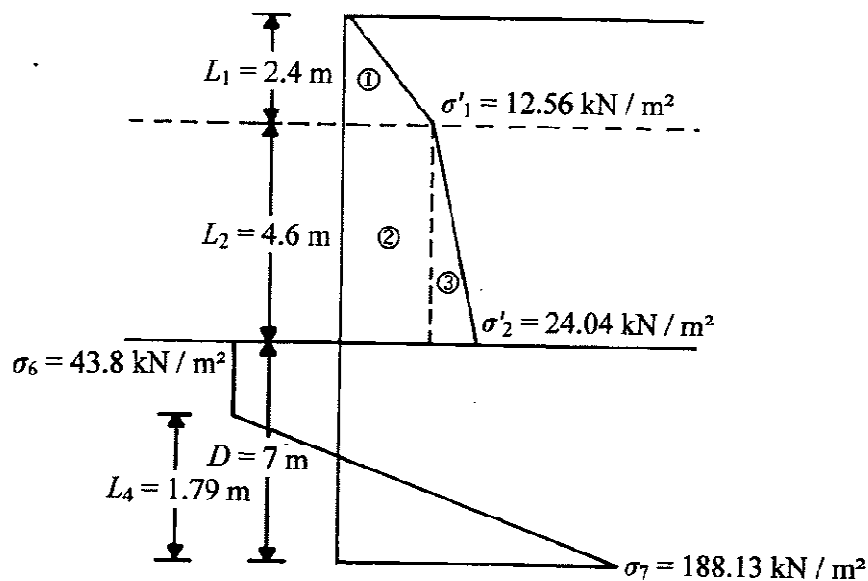
b. Total length = $4 + 8 + (1.3)(13.31) = 29.3 \text{ m}$

c. $z' = \sqrt{\frac{2P}{\gamma'(K_p - K_a)}} = \sqrt{\frac{(2)(313.05)}{(8.39)(2.948)}} = 5 \text{ m}$

$$M_{\max} = P(\bar{z} + z') - \frac{1}{6}\gamma'z'^3(K_p - K_a)$$

$$= (313.05)(5.47 + 5) - \frac{1}{6}(8.39)(5)^3(2.948) = 2762 \text{ kN} \cdot \text{m} / \text{m}$$

9.5 a. Refer to the following figure:



$$K_a = \tan^2\left(45 - \frac{\phi'}{2}\right) = \tan^2(45 - 15) = \frac{1}{3}$$

$$K_a = \tan^2\left(45 + \frac{\phi'}{2}\right) = \tan^2(45 + 15) = 3$$

$$\sigma'_1 = \gamma L_1 K_a = (15.7)(2.4)\frac{1}{3} = 12.56 \text{ kN} / \text{m}^2$$

$$\sigma'_2 = (\gamma L_1 + \gamma' L_2) = [(15.7)(2.4) + (17.3 - 9.81)(4.6)]\frac{1}{3} = 24.04 \text{ kN} / \text{m}^2$$

$$P_1 = \text{Areas of 1 + 2 + 3} = 15.07 + 57.78 + 26.4 = 99.25 \text{ kN} / \text{m}$$

$$\bar{z}_1 = \frac{(15.07)(5.4) + (57.78)(2.3) + (26.4)\left(\frac{4.6}{3}\right)}{99.25} = 2.567 \text{ m}$$

$$\text{Eq. (9.44): } D^2[4c - (\gamma L_1 + \gamma' L_2)] - 2DP_1 - \frac{P_1(P_1 + 12c\bar{z}_1)}{(\gamma L_1 + \gamma' L_2) + 2c} = 0$$

$$D^2[(4)(29) - 72.13] - 2D(99.25) - \frac{99.25[99.25 + (12)(29)(2.567)]}{72.13 + (2)(29)} = 0$$

$$43.87D^2 - 198.5D - 757 = 0; D = 7 \text{ m}$$

b. Length of sheet pile = $2.4 + 4.6 + 1.4(7) = 16.8 \text{ m}$

c. Eq. (9.38): $\sigma_6 = 4c - (\gamma L_1 + \gamma' L_2)$

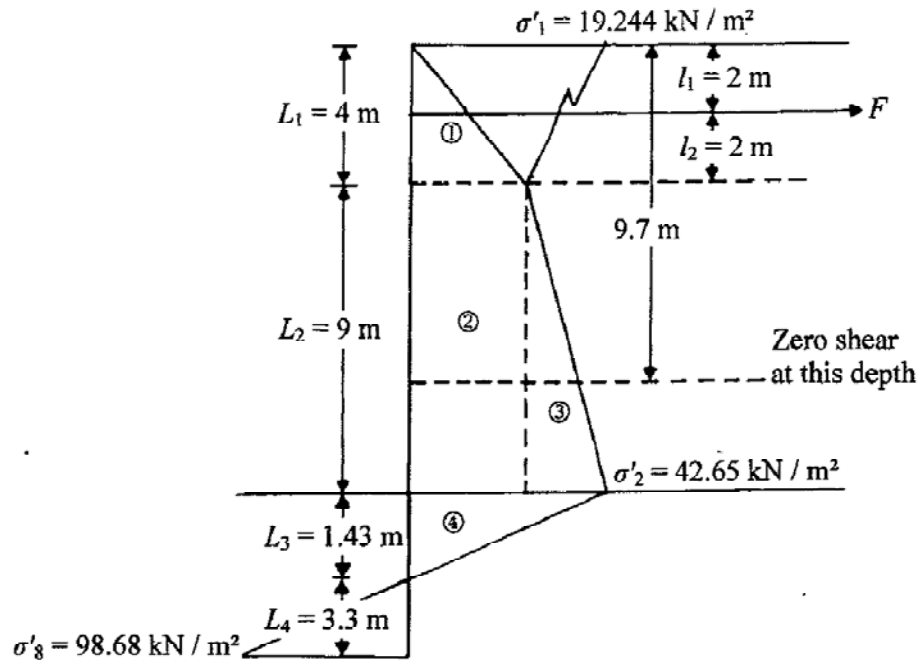
$$= (4)(29) - [(15.7)(2.4) - (17.3 - 9.81)(4.6)] = 43.87 \text{ kN/m}^2$$

$$\text{Eq. (9.45): } z' = \frac{P_1}{\sigma_6} = \frac{99.25}{43.87} = 2.26 \text{ m}$$

$$M_{\max} = P_1(z' + \bar{z}_1) - \frac{\sigma_6 z'^2}{2} = (99.25)(2.26 + 2.567) - \frac{(43.87)(2.26)^2}{2}$$

$$= 479.08 - 112.04 = 367.04 \text{ kN} \cdot \text{m / m of the wall}$$

9.8 a. Refer to the figure. $\phi' = 34^\circ$.



$$K_a \tan^2\left(45 - \frac{\phi'}{2}\right) = 0.283; \quad K_p \tan^2\left(45 + \frac{\phi'}{2}\right) = 3.537$$

$$\sigma'_1 = \gamma L_1 K_a = (17)(4)(0.283) = 19.244 \text{ kN/m}^2$$

$$\sigma'_2 = (\gamma L_1 + \gamma' L_2) K_a = [(17)(4) + (19 - 9.81)(9)](0.283) = 42.65 \text{ kN/m}^2$$

$$L_3 = \frac{42.65}{\gamma'(K_p - K_a)} = \frac{42.65}{(9.19)(3.254)} \approx 1.43 \text{ m}$$

$$P = \text{Area of 1 + 2 + 3 + 4} = 38.49 + 173.2 + 105.33 + 30.49 = 347.51 \text{ kN/m}$$

$$\bar{z} = \frac{1}{347.51} [(38.49)(11.76) + (173.2)(5.93) + (105.33)(4.43) + (30.49)(0.95)] = 5.68 \text{ m}$$

Eq. (9.58):

$$L_4^3 + 15L_4^2(l_2 + L_2 + L_3) - \frac{3P[(L_1 + L_2 + L_3) - (\bar{z} + l_1)]}{\gamma'(K_p - K_a)} = 0$$

$$L_4^3 + 15L_4^2(2 + 9 + 1.43) - \frac{(3)(347.51)[(4 + 9 + 1.43) - (5.68 + 2)]}{(9.19)(3.254)} = 0$$

$$L_4^3 + 18.645 L_4^2 - 235.32 = 0; L_4 \approx 3.3 \text{ m}$$

$$D = 3.3 + L_3 = 3.3 + 1.43 = 4.73$$

b. Eq. (9.56): $\sigma'_8 = \gamma'(K_p - K_a)L_4 = (9.19)(3.254)(3.3) \approx 98.68 \text{ kN / m}^2$

The pressure distribution diagram is shown in the figure.

c. Eq. (9.57):

$$F = P - \frac{1}{2} [\gamma'(K_p - K_a)L_4^2] = 347.51 - \frac{1}{2} [(9.19)(3.254)(3.3)^2] = 184.68 \text{ kN / m}$$

9.9 a. $D_{\text{actual}} = (1.3)(D_{\text{theory}}) = (1.3)(4.73) \approx 6.15 \text{ m}$

For zero shear, use Eq. (9.60): $\frac{1}{2} \sigma'_1 L_1 - F + \sigma'_1(z - L_1) + \frac{1}{2} K_a \gamma'(z - L_1)^2 = 0$

Let $z - L_1 = x$

$$\frac{1}{2} \sigma'_1 L_1 - F + \sigma'_1 x + \frac{1}{2} K_a \gamma' x^2 = 0$$

$$\frac{1}{2} (19.244)(4) - 184.68 + 19.244x + \frac{1}{2} (0.283)(9.19)x^2 = 0$$

$$x^2 + 14.8x - 112.46 = 0; x \approx 5.7 \text{ m}$$

$$z = x + L_1 = 5.7 + 4 = 9.7 \text{ m}$$

Taking the moment about the point of zero shear

$$M_{\text{max}} = -\frac{1}{2} \sigma'_1 L_1 \left(x + \frac{4}{3} \right) + F(x + 2) - \sigma'_1 \left(\frac{x^2}{2} \right) - \frac{1}{2} K_a \gamma' x^2 \left(\frac{x}{3} \right)$$

With $\sigma'_1 = 19.244 \text{ kN / m}$, $L_1 = 4$, $x = 5.7$, $F = 184.68 \text{ kN / m}$

$$M_{\text{max}} \approx 759 \text{ kN - m / m}$$

b. $H' = L_1 + L_2 + D_{\text{actual}} = 4 + 9 + 6.15 = 19.15 \text{ m} \approx 20 \text{ m}$

Section	I (m ⁴ /m)	H' (m)	$\rho = \frac{10.91 \times 10^{-7} H'^4}{EI}$	$\log \rho$	S (m ³ /m)	$M_d = S\sigma_{at}$ (kN/m - m)	$\frac{M_d}{M_{max}}$
PZ-35	493.4×10^{-6}	20	16.85×10^{-4}	-2.773	260.5×10^{-5}	547.05	0.721
PZ-27	251.5×10^{-6}	20	33.05×10^{-4}	-2.481	162.3×10^{-5}	340.83	0.449

If $\log \rho$ and M_d/M_{max} are plotted in Figure 9.22 with the curve for loose sand as the separating line, it can be seen that **PZ-35 will be sufficient**; however, PZ-27 is not suitable.

9.16 From Figure 9.33(a), for $\phi' = 30^\circ$, the value of $K_a \approx 0.31$.

$$W = Ht\gamma_{\text{concrete}} = (5) \left(\frac{3}{12} \right) (150) = 187.5 \text{ lb / ft}$$

Eq. (9.79):

$$K_p \sin \delta' = \frac{W + \frac{1}{2} \gamma H^2 K_a \sin \phi'}{\frac{1}{2} \gamma H^2} = \frac{187.5 + \frac{1}{2} (110)(5)^2 (0.31)(0.5)}{\frac{1}{2} (110)(5)^2} = 0.291$$

From Figure 9.33(b), $K_p \cos \delta' \approx 3.4$

Eq. (9.78):

$$P'_u = \frac{1}{2} \gamma H^2 (K_p \cos \delta' - K_a \cos \phi') = \frac{1}{2} (110)(5)^2 [3.4 - (0.31)(0.866)] = 4305.9 \text{ lb / ft}$$

Assume loose sand.

$$\text{Eq. (9.85): } P'_{us} = \left(\frac{C_{ov} + 1}{C_{ov} + \frac{H}{h}} \right) P'_u = \left(\frac{14 + 1}{14 + \frac{5}{3}} \right) (4328.5) = 4144.3 \text{ lb / ft}$$

$$\frac{S' - B}{H + h} = \frac{7 - 4}{5 + 3} = 0.375. \text{ Referring to Figure 9.35(b),}$$

$$\frac{B_e - B}{H + h} \approx 0.19; B_e = (0.19)(8) + 4 = 5.52$$

$$P_u = P'_{us} B_e = (4122.7)(5.52) \approx 22,757 \text{ lb} = \mathbf{22.76 \text{ kip}}$$

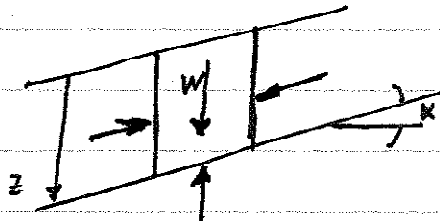
9.17 Eq. (9.82):

$$P_u = \frac{5.4}{\tan \phi'} \left(\frac{H^2}{Bh} \right)^{0.28} \gamma B h H = \frac{5.4}{\tan 32} \left(\frac{0.9^2}{0.3B} \right)^{0.28} (17)(B)(0.3)(0.9) = 52.39 B^{0.72} \text{ kN}$$

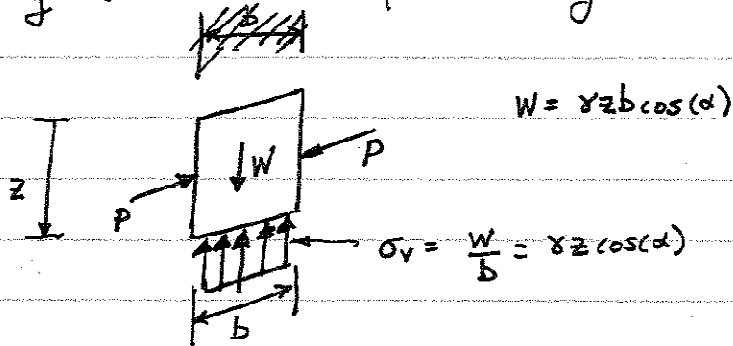
B (m)	$P_u = 52.39 B^{0.72}$ (kN)
0.3	22
0.6	36.3
0.9	48.6

Bonus Problem Solution:

Consider for a moment an infinite granular slope

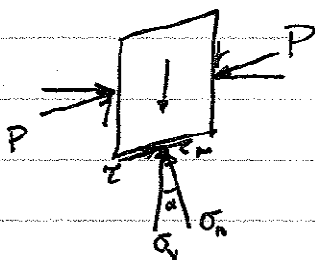


Isolating this slice from the slope and drawing its FBD we have:



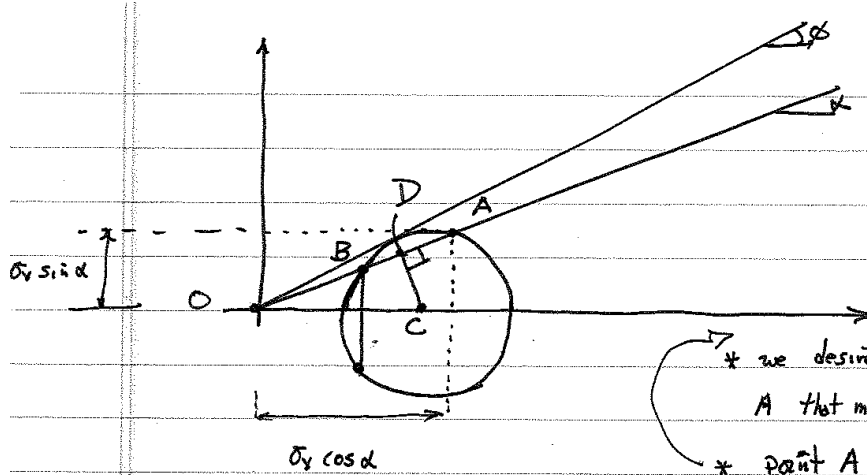
The force P is the ~~force~~ ^{one} that would be exerted on a retaining wall, were one present.

To solve for P in the presence of soil failure, we resort to a Mohr's circle representation:



$$\tau = \sigma_v \sin \alpha$$

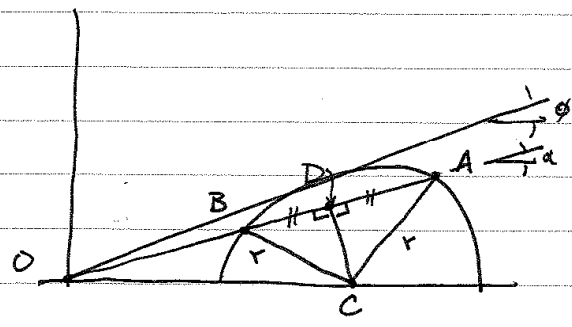
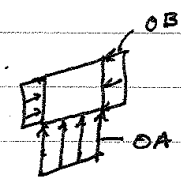
$$\sigma_n = \sigma_v \cos \alpha$$



- * we desire the M.C. passing through A that minimizes P
- * point A represents the stress state on planes || to the slope at depth z
- * pt. B is ∴ the so-called pole or origin of planes
- * the stress at point B represents the stress on vertical planes.

- * magnitude of the stress on vertical plane = \overline{OB} (average)
- * magnitude of stress resultant on slope plane = \overline{OA}

$$\text{ratio} = \frac{OB}{OA} = \frac{OD - BD}{OD + DA} = \dots$$



$$BD = DA = (r^2 - DC^2)^{1/2}$$

$$r = OC \sin \phi$$

$$DC = OC \sin \alpha$$

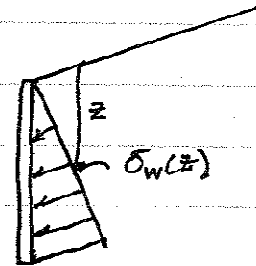
$$OD = OC \cos \alpha$$

$$\therefore \frac{OB}{OA} = \frac{OC \cos \alpha - OC (\sin^2 \phi - \sin^2 \alpha)^{1/2}}{OC \cos \alpha + OC (\sin^2 \phi - \sin^2 \alpha)^{1/2}} = \frac{\cos \alpha - (\sin^2 \phi - \sin^2 \alpha)^{1/2}}{\cos \alpha + (\sin^2 \phi - \sin^2 \alpha)^{1/2}}$$

$$\frac{OB}{OA} = \frac{\cos \alpha - (\cos^2 \alpha - \cos^2 \phi)^{1/2}}{\cos \alpha + (\cos^2 \alpha - \cos^2 \phi)^{1/2}}$$

or: $\sigma_w = \sigma_v(z) \frac{OB}{OA}$

↑
wall stress



$$P_c = \int_0^H \sigma_w(z) dz = \int_0^H \sigma_v(z) \frac{OB}{OA} dz$$

$$= \frac{OB}{OA} \int_0^H \gamma z \cos \alpha dz = \frac{\gamma H^2}{2} \cos \alpha \frac{OB}{OA}$$

$$\therefore P_a = \frac{\gamma H^2}{2} \cos \alpha \left[\frac{\cos \alpha - (\cos^2 \alpha - \cos^2 \phi)^{1/2}}{\cos \alpha + (\cos^2 \alpha - \cos^2 \phi)^{1/2}} \right]$$

Using the same procedure and an alternative M.C. tangent to the failure envelope, we could also derive Rankine's passive stress on a vertical retaining wall with a granular backfill.

$$P_p = \frac{\gamma H^2}{2} \cos \alpha \left[\frac{\cos \alpha + (\cos^2 \alpha - \cos^2 \phi)^{1/2}}{\cos \alpha - (\cos^2 \alpha - \cos^2 \phi)^{1/2}} \right]$$